

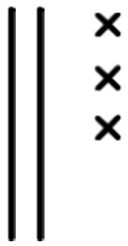
Prénom :

Date :

LES DIZAINES ET LES UNITÉS (2)




1- **Complète** comme dans l'exemple.



$10 + 10 + 3 = 23$



.....



.....



.....

2- **Écris** les résultats des additions.

$10 + 10 + 10 + 5 = \dots$

$40 + 1 = \dots$

$7 + 30 = \dots$

$10 + 10 + 10 + 10 + 10 = \dots$


$20 + 9 = \dots$

$2 + 60 = \dots$

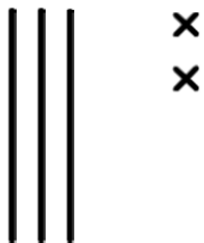
$10 + 10 + 10 + 10 + 8 = \dots$

$70 + 4 = \dots$

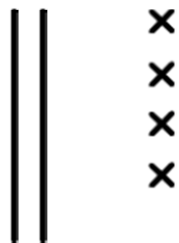
$8 + 50 = \dots$




3- **Complète** les dessins pour avoir la bonne quantité.



34



54



67



86

4- **Complète** le tableau.

36	$30 + 6$	$10 + 10 + 10 + 6$	
28	
....	$10 + 10 + 10 + 10 + 3$	
....	
....	$20 + 5$	

RÉVISIONS

Trace à la règle.

